

Число «сбежало».

$$\square - 3 = 5$$

$$\square + 4 = 10$$

$$1 + \square = 6$$

$$6 - \square = 6$$

$$\square - 7 = 1$$

$$\square + 6 = 10$$

$$7 + \square = 9$$

$$10 - \square = 8$$

$$\square - 3 = 7$$

$$9 - \square = 2$$

$$\square - 1 = 1$$

$$3 + \square = 7$$

$$\square + 1 = 10$$

$$7 - \square = 1$$

$$\square - 4 = 6$$

$$1 + \square = 7$$

$$10 - \square = 7$$

$$\square - 2 = 2$$

$$\square + 2 = 8$$

$$4 + \square = 7$$

$$10 - \square = 5$$

$$7 + \square = 10$$

$$\square + 1 = 5$$

$$\square - 7 = 9$$

$$8 - \square = 1$$

$$5 + \square = 9$$

$$\square + 3 = 6$$

$$\square - 6 = 2$$

$$3 + \square = 4$$

$$6 - \square = 1$$

$$\square + 5 = 9$$

$$\square - 6 = 1$$

$$6 + \square = 8$$

$$\square - 0 = 6$$

$$10 - \square = 3$$

$$\square + 6 = 10$$

$$5 + \square = 6$$

$$10 - \square = 9$$

$$\square - 1 = 3$$

$$6 + \square = 10$$

$$8 - \square = 2$$

$$\square + 3 = 7$$

$$\square - 2 = 5$$

$$\square + 1 = 7$$

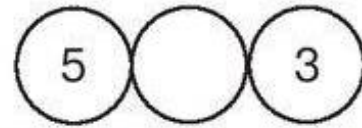
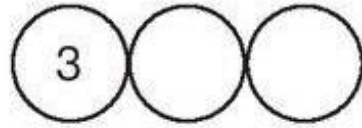

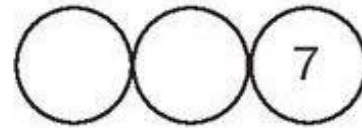
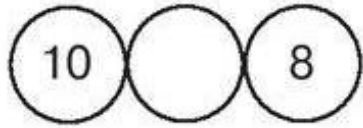
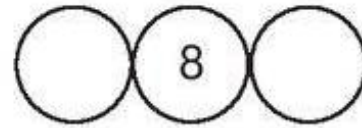
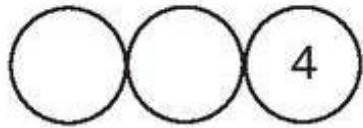

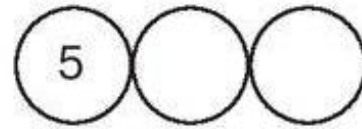
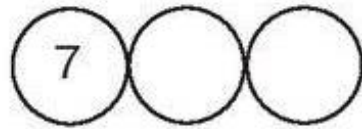
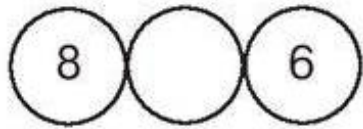
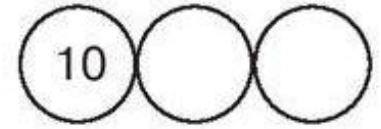
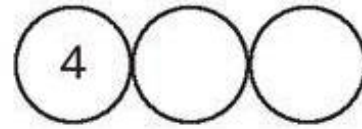


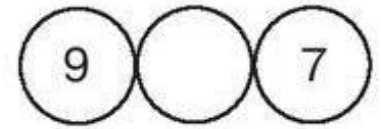
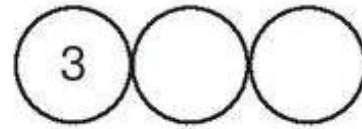
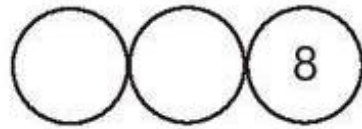
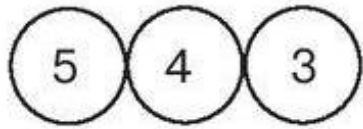
$$10 - \square = 4$$

$$1 + \square = 3$$

$$1 + \square = 6$$

$$\square - 7 = 2$$

• Впиши в пустые кружки нужные числа.



• Впиши в пустые кружки нужные числа.

